



SESSION: 2022-2023

CLASS- II B

SUMMER VACATION PROJECT

6

CLEAN WATER AND SANITATION





Notes:-

- * All the Holiday Homework Projects should be done neatly by the child with the assistance of parents.
- * Holiday Homework is mandatory to be submitted on 1st July 2022 when school reopens.
- * Holiday Homework should be done as per the instructions given.
- * Holiday Homework will be evaluated in Subject Enrichment Activity which is of 10 marks and included in Mid Term Evaluation.
- * Do one page writing in English Cursive book and Hindi Sulekh Pustak daily.
- * Revision Worksheets are attached. Complete it and submit them with holiday homework.

HAPPY HOLIDAYS!!!

TOPIC-SDG GOAL 6-(Clean Water and Sanitation)

SUBJECT	TOPIC	TASK ASSIGNED
English	Save Water	Slogan writing- “Save Every Drop” - Write few lines on the given slogan in A-4 sheet paper.
Hindi	‘स्वच्छता अपनाओ बीमारी दूर भगाओ’	चित्र को देखकर स्वच्छता के महत्त्व के बारे में A-4 SHEET में लिखिए । 
Mathematics	Water usage	Calculate- <ol style="list-style-type: none"> 1. Number of glasses of water is used for drinking every day by your family members. 2. Amount of water is used for : <ol style="list-style-type: none"> a. Washing clothes everyday b. Bathing c. Cooking d. Mopping e. Drinking Water 3. How can we reduce the wastage of water from RO water filter? Mention five measures.
EVS	Personal hygiene	Having good hygiene will save you and the people around you from a number of various diseases. What are the things that you need to do to clean up this boy?  *Write few lines on personal hygiene in your notebook.
Computer	Misuse of Water	Make a collage on misuse of water in MS word and take the print out of the same
G.K.	SwachhSarveshan	Write and paste the picture of the top 10 clean city in India in a scrap book.



SESSION: 2021-2022
CLASS: II
SUBJECT: English
REVISION WORKSHEET

Name: _____

Section: _____

Date: _____

Q1. Answer the following questions-

a) Whose voices did the little plant hear?

Ans. _____

b) What did the little plant do?

Ans. _____

c) Where was the little plant sleeping?

Ans. _____

d) How was Chandra by nature?

Ans. _____

e) Who was shocked to see his tool?

Ans. _____

f) Why did Chandra lose the competition?

Ans. _____

Q2. Write the meanings of the following words:

(a) Buried: _____

(b) Creep: _____

(c) Sculptor: _____

(d) Blunt: _____

Q3. Make sentences with the following words:

(a) Bust: _____

(b) Rose up: _____

Q4. Choose the correct answers. Put a tick (✓) mark:

a) Laxman was a _____ man.

(i) rude (ii) mean (iii) kind

b) A great sculptor is who can work with someone else's _____.

(i) tools (ii) Knife (iii) stone

Q5. Fill in the blanks:

a. The little plant was _____ inside the seed.

b. The little plant rose to see _____ world outside.

Q6. Mark these sentences as “True or False”

a) The little plant did not hear voices of sunshine and rain.

b) The little plant was not buried inside the soil.

c) Laxman gladly gave his tools to Chandra.

d) Chandra lost because of his folly and jealousy



Q7. Look at the garden scene .Then complete the following sentences using “naming words” (common nouns) from the box below.

bicycle, toys, book, benches, girl, Kite, garden, children, trees, dog

This is a _____. There are many _____ in it. _____ is flying in the air. Many _____ are playing in the garden. _____ is also playing with them.

A _____ is riding a _____. There are some _____ also sitting in the garden. One girl is reading a _____ and some children are playing with _____.

Q8. Select the Nouns and put in appropriate box.

store , restaurant , teacher, vegetables , Mango , cat , January, Diwali, dish, uncle
Monday, Wal-Mart, MacDonald's , Mona, boy, Mr. Brown , beach , Uncle-chips
school, Netaji park , table , animal, horse,

Proper Nouns	Common Nouns



SESSION: 2021-2022

CLASS: II

SUBJECT: हिंदी
संशोधन कार्यपत्रक

नाम: _____

दिनांक : _____

क. सही उत्तर चुनिए।

१) सूरज किस दिशा से उदय होता है ?

पूरब पश्चिम दक्षिण

२) जाग गए खेत , _____ वन।

खलिहान पहाड़ बाग

३) परी के एक जादुई _____ थी।

छड़ी लकड़ी चाबी

२- _____ के फल स्वादिष्ट थे।

बगीचे खेत जंगल

ख. शब्दों के अर्थ लिखिए।

१) सुखदाई - _____

२) उपवन- _____

३) भटकना - - _____

४) स्वादिष्ट- _____

ग. प्रश्नो के उत्तर दीजिये।

१) परी ने बच्चो को क्या समझाया ?

उ) _____

२) कविता में मोती और मणियां किसे कहा गया है ?

उ) _____

३) हिंदी भाषा में कितने स्वर हैं ?

उ) _____

४) मिंटू रास्ता क्यों भटक गया था ?

उ) _____

घ. खली स्थान में उत्तर लिखिए।

१) _____ के द्वारा हम अपने _____ की बात दूसरों को समझाते हैं।

२) भाषा के _____ रूप होते हैं।

३) टेलीफोन _____ भाषा का रूप हैं।

४) मौखिक भाषा में _____ और _____ बातों का आदान - प्रदान होता है।

५) _____ के निश्चित क्रम को व्यंजनमाला कहते हैं।

६) भाषा की सबसे छोटी इकाई _____ कहलाती है।

७) क्ष,त्र,ज्ञ,श्र _____ व्यंजन हैं।



SESSION: 2022-2023
CLASS : II
SUBJECT: MATHS
REVISION WORKSHEET

Name: _____

Section: _____

Date: _____

Q1. Write the number names of the following:

a. 15- _____

b. 21- _____

c. 338- _____

d. 675- _____

e. 992- _____

f. 54- _____

Q2. Write numeral of the given number names.

a. _____ - Forty- nine

b. _____ - Seventy – four

c. _____ - Ninety- eight

d. _____ - Two hundred five

e. _____ - Nine hundred seventy- seven

f. _____ - Seven hundred forty-six

Q3. Write the following numbers in expanded form.

a. $28 = \underline{\quad}$ tens + $\underline{\quad}$ ones = $\underline{\quad}$ + $\underline{\quad}$

b. $55 = \underline{\quad}$ tens + $\underline{\quad}$ ones = $\underline{\quad}$ + $\underline{\quad}$

c. $678 = \underline{\quad}$ hundreds + $\underline{\quad}$ tens + $\underline{\quad}$ ones = $\underline{\quad}$ + $\underline{\quad}$ + $\underline{\quad}$

d. $994 = \underline{\quad}$ hundreds + $\underline{\quad}$ tens + $\underline{\quad}$ ones = $\underline{\quad}$ + $\underline{\quad}$ + $\underline{\quad}$

e. $689 = \underline{\quad}$ hundreds + $\underline{\quad}$ tens + $\underline{\quad}$ ones = $\underline{\quad}$ + $\underline{\quad}$ + $\underline{\quad}$

f. $973 = \underline{\quad}$ hundreds + $\underline{\quad}$ tens + $\underline{\quad}$ ones = $\underline{\quad}$ + $\underline{\quad}$ + $\underline{\quad}$

g. $98 = \underline{\quad}$ tens + $\underline{\quad}$ ones = $\underline{\quad}$ + $\underline{\quad}$

h. $44 = \underline{\quad}$ tens + $\underline{\quad}$ ones = $\underline{\quad}$ + $\underline{\quad}$

Q4. Fill in the blanks using $<$, $>$ or $=$.

a. $12 \underline{\quad} 14$

b. $245 \underline{\quad} 321$

c. $223 \underline{\quad} 223$

d. $54 \underline{\quad} 54$

e. $82 \underline{\quad} 73$

f. $70 \underline{\quad} 74$

g. $112 \underline{\quad} 567$

h. $980 \underline{\quad} 876$

Q5. Write the place value of underlined numbers.

a. 362 - _____

b. 72 - _____

c. 958 - _____

d. 235 - _____

e. 362 - _____

f. 72 - _____

g. 958 - _____

h. 235 - _____

Q6. Count forward :

a. 31 to 40 - _____

b. 760 to 769 - _____

c. 10 to 20 - _____

d. 110 to 120 - _____

Q7. Arrange the numbers in ascending and descending order.

a. 956, 457, 112, 138

Ascending order: _____.

b. 44, 34, 93, 37

Descending order: _____.

c. 39, 79, 83, 54

Ascending order: _____.

d. 569, 846, 443, 797

Descending order: _____.

Q8. Write the numbers in short form.

a. 2 tens 7 ones = _____ + _____ = _____

b. 6 tens 6 ones = _____ + _____ = _____

c. 9 hundreds + 8 tens + 5 ones = _____

d. 4 hundreds + 4 tens + 2 ones = _____

e. 7 hundreds + 4 tens + 5 ones = _____

f. 2 tens 4 ones = _____ + _____ = _____

g. 8 tens 4 ones = _____ + _____ = _____



SESSION: 2022-2023
CLASS : II
SUBJECT: EVS
REVISION WORKSHEET

Name:

Section-

Date:

Q1. Answer in one word:

1. The children of uncles and aunts.

2. Name the pumping organ of body?

3. Which organ helps you to smell?

4. What a small family with only parent is called?

5. Name the organ which is located inside our head.

6. Which organ tells the thinking organ that the food is delicious?

7. Which sense organ do you feel a touch?

Q2. Fill in the blanks:

- a. We have _____ on the tip of our fingers.
- b. Nuclear family is a _____ family.
- c. I can jump with my _____.
- d. Our head rests on our _____.

- e. I kick a ball using my _____.
- f. The food we eat gets digested in _____.
- g. Members of _____ resemble each other.
- h. _____ lungs we have in our body.
- i. _____ is the thinking organ.
- j.

Q3. Answer the following questions:

1. Name any two body parts which you cannot see from outside.

2. Name two different types of families?

3. Write two good manners which we should follow.

4. Which body part beats the fast when you run?

5. With which sense organ do you smell?

6. What is body posture?

7. What are the hard parts inside our body?

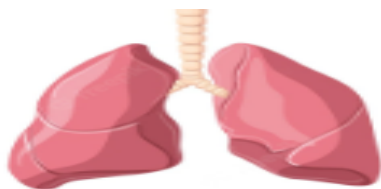
8. What are the responsibility of children in the family?

9. What happens if we do not eat healthy food?

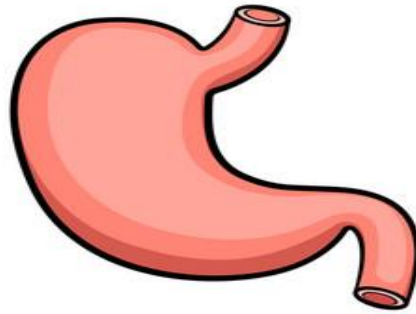
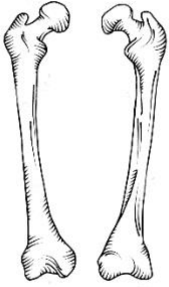
Q4. Identify the pictures with the given help box:

EYES	LUNGS	KIDNEY	HEART	NOSE	BONE	EAR	STOMACH	BONE
------	-------	--------	-------	------	------	-----	---------	------









Q5. Write a paragraph on 'My Family'.



SESSION: 2022-2023
CLASS: II
SUBJECT: COMPUTER
REVISION WORKSHEET

Name: _____

Section: _____

Date: _____

A. Fill in the blanks with the help of the given words.

Sums Type Draw Information Music

1. You can _____ pictures on a computer.
2. You can solve _____ on a computer.
3. You can _____ on a computer.
4. You can use a computer to listen to _____.
5. You can store a lot of _____ on a computer.

B. Guess the places where computers are used.

1. Teachers use computer in

S C _____ O O _____ S

2. Officers use computers in

O F _____ I _____ E S

3. Doctors use computers in

H _____ S P _____ T _____ L S

4. Bankers use computers in

B A _____ K S

5. Shopkeepers use computers in

M _____ L _____ S

C. Rewrite the jumbled letters.

- 1. ESDKPOT- _____
- 2. BATLET- _____
- 3. PALPOT - _____
- 4. MARST HPONE - _____
- 5. OMCPETUR- _____

D. Write true or false

- 1. A computer gets tired easily. _____
- 2. A computer makes our work easy. _____
- 3. Computers are used to conduct research on space. _____
- 4. Computer has no feelings or emotions. _____
- 5. At school computer is used to watch cartoons. _____

E. Write the difference between Man and Computer.
